

1301/312
1304/312
1305/312
TECHNICAL DRAWING
June/July 2018
Time: 3 hours



THE KENYA NATIONAL EXAMINATIONS COUNCIL

CRAFT CERTIFICATE IN CARPENTRY AND JOINERY
CRAFT CERTIFICATE IN MASONRY
CRAFT CERTIFICATE IN PLUMBING

TECHNICAL DRAWING

3 hours

INSTRUCTIONS TO CANDIDATES

You should have the following for this examination:

Drawing paper size A₂;

Drawing instruments.

Answer FIVE questions of the following EIGHT questions.

Answers ALL questions in the answer booklet provided.

All questions carry equal marks.

Maximum marks for each part of a question are indicated.

All dimensions are in millimeters.

Candidates should answer the questions in English.

This paper consists of 9 printed pages.

Candidates should check the question paper to ascertain that all the pages are printed as indicated and that no questions are missing.

SECTION A (40 marks)

205101002C

1. (a) With the aid of sketches, show the convention for each of the following:

- (i) break in rod;
 (ii) break in pipe;
 (iii) third angle projection.

200-

(3 marks)

(b) Construct a parabolic arch whose width and height are 75 mm and 65 mm respectively. (5 marks)

(c) **Figure 1** shows a truncated hexagonal pyramid drawn in first angle projection. Using the scale of 1:1 draw the following:

- (i) plan;
 (ii) end elevation in direction E.E.

(12 marks)

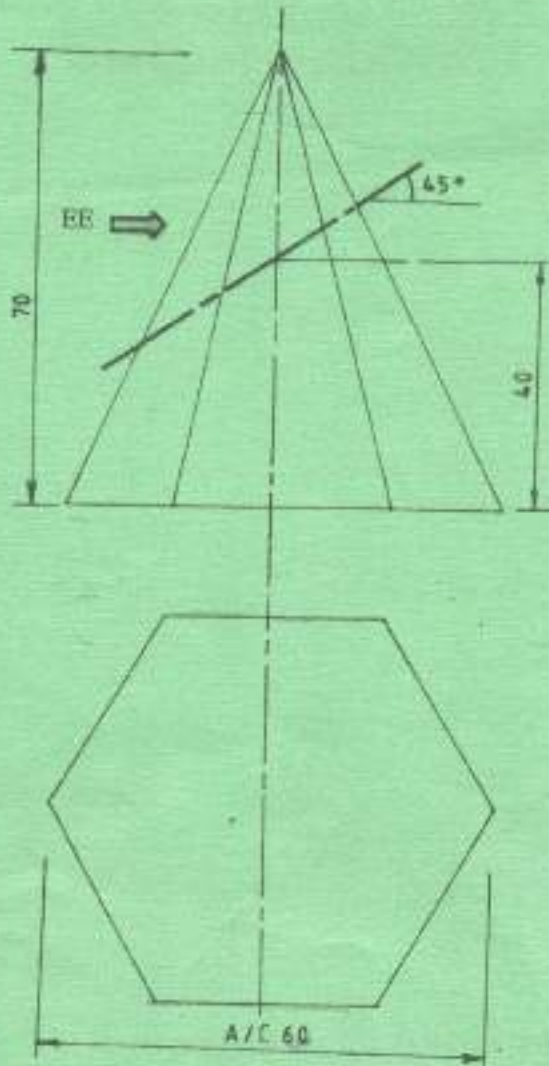


Fig 1

2

1301/312

1304/312

1305/312 ✓

June/July 2018

2. (a) Construct a diagonal scale twice full size to measure to an accuracy of 0.1 mm up to 60 mm. Show the following readings:
- (i) 38.6 mm;
 - (ii) 51.5 mm.
- (8 marks)
- (b) Make free hand sketches of the following tools:
- (i) star screw driver;
 - (ii) claw hammer;
 - (iii) mortise chisel;
 - (iv) rasp file.
- (8 marks)
- (c) Construct a rectangle given the diagonal as 70 mm and length of one side as 40 mm.
- (4 marks)

3. Figure 2 shows an isometric drawing of a machine block. Using third angle projection, draw the following views full size:

- (i) front elevation in direction F.E.;
- (ii) end elevation in direction E.E.
- (iii) plan.

Include all the hidden details and ten dimensions.

(20 marks)

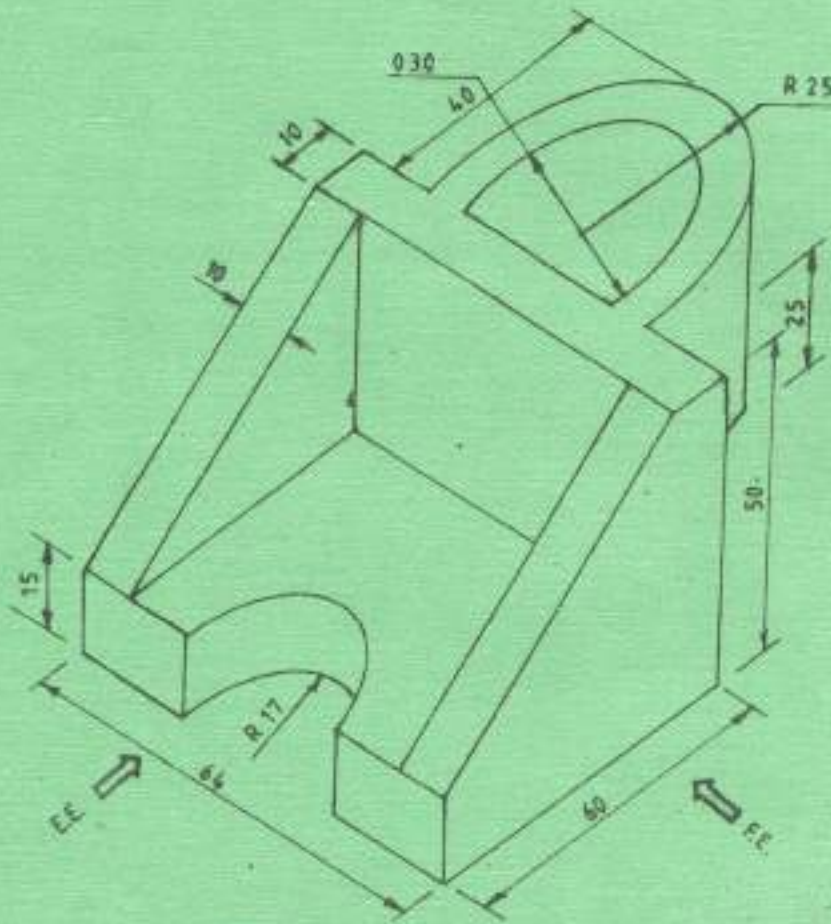


Fig. 2

4. Figure 3 shows the front elevation of a cylinder intersecting a cone. Copy the given view and draw the following:

- (i) plan;
- (ii) line of intersection;
- (iii) development of cylinder A.

(20 marks)

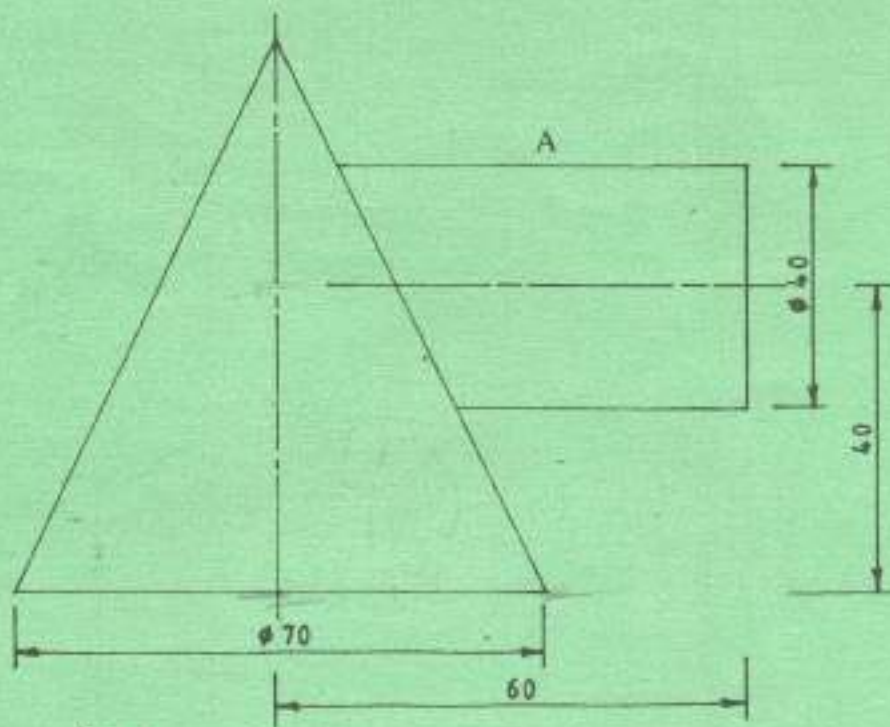


Fig. 3

5. Figure 4 shows two views of a shaped block drawn in first angle projection. Draw full size the oblique projection of the block and include dimensions. (20 marks)

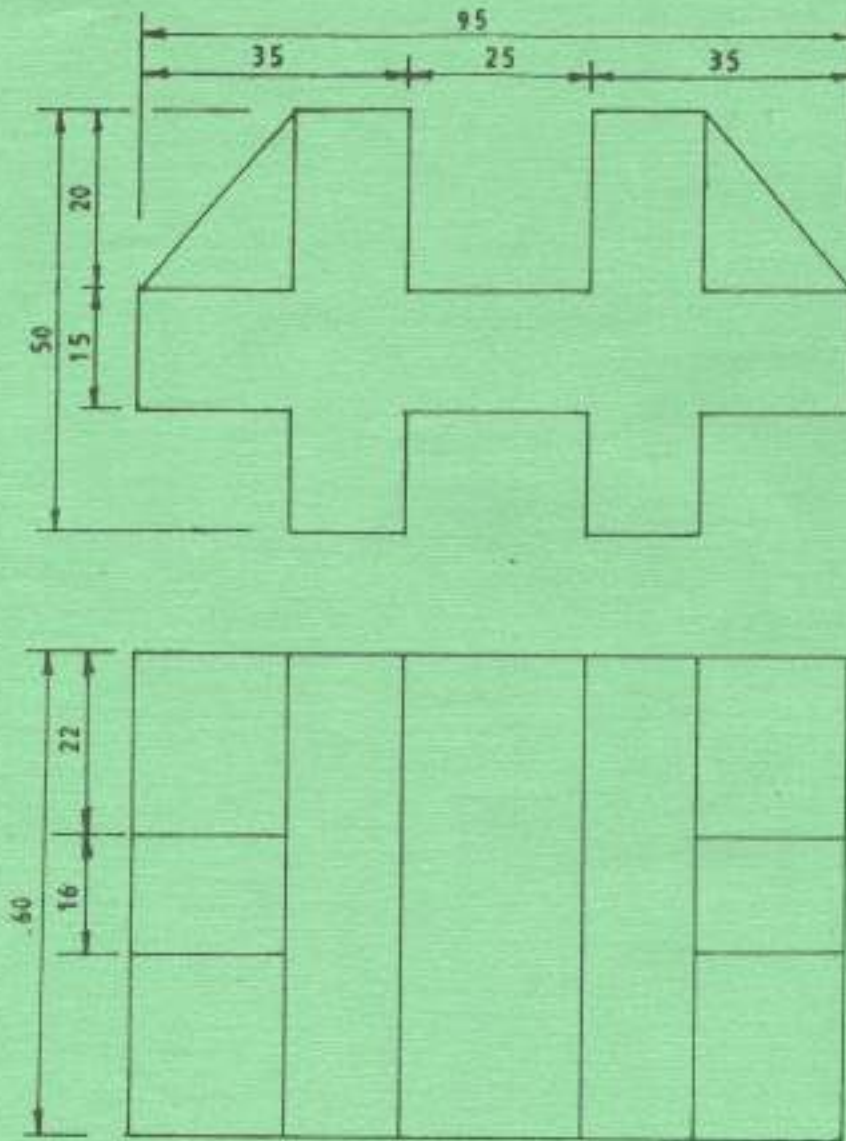


Fig 4

6. (a) Figure 5 shows an elevation of a gate pillar. draw an isometric view of the pillar making corner X the lowest point.



Fig. 5

(15 marks)

- (b) Draw a circle to touch three points XYZ whose distances are: $XY = 45$, $YZ = 50$, $XZ = 65$.

(5 marks)

7. Figure 6 shows the outline of a reinforced concrete deck for a water tank. Using a scale of 1:20 draw section A-A. Use the information given. (20 marks)

Information given:

- (i) Pad foundation size: 600 x 600 x 250 mm
900 mm below ground level
- (ii) Foundation walls: 200 mm thick stone work
- (iii) Floor: 150 mm oversite concrete on 200 mm hardcore.
- (iv) Concrete columns: 200 x 200 mm
- (v) Beams: 200 x 300 mm concrete
- (vi) Slab: 150 mm thick concrete
- (vii) Pipe outlet: 100 mm ϕ gms
- (viii) Floor to beam soffit height: 2800 mm
- (ix) Parapet: 150 mm thick concrete, 600 mm high
- (x) Coping: 250 x 50 mm average P.C.C twice weathered
- (xi) Screed: 20 mm thick laid at cross falls
- (xii) Mastic asphalt: 20 mm thick
- (xiii) Angle fillet: 40 x 40 mm

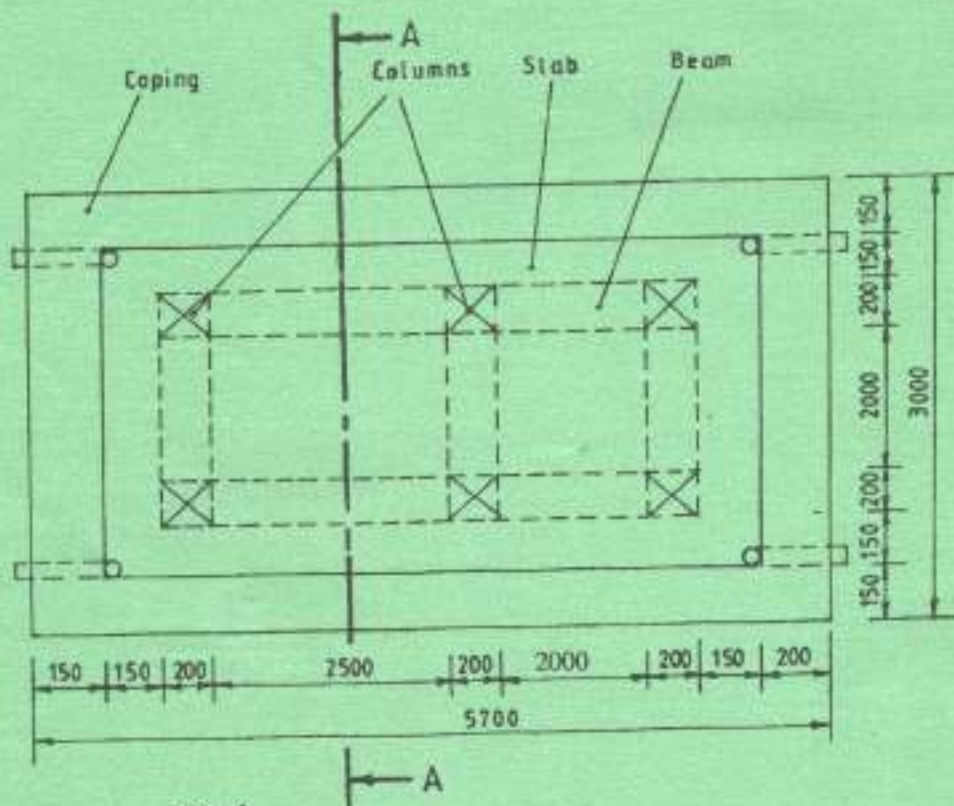


Fig. 6

8. Figure 7 shows three views of a flat roof hut in first angle projection. Copy the given layout full size and draw a two point perspective view of the hut using a scale of 1:50. (20 marks)

(20 marks)

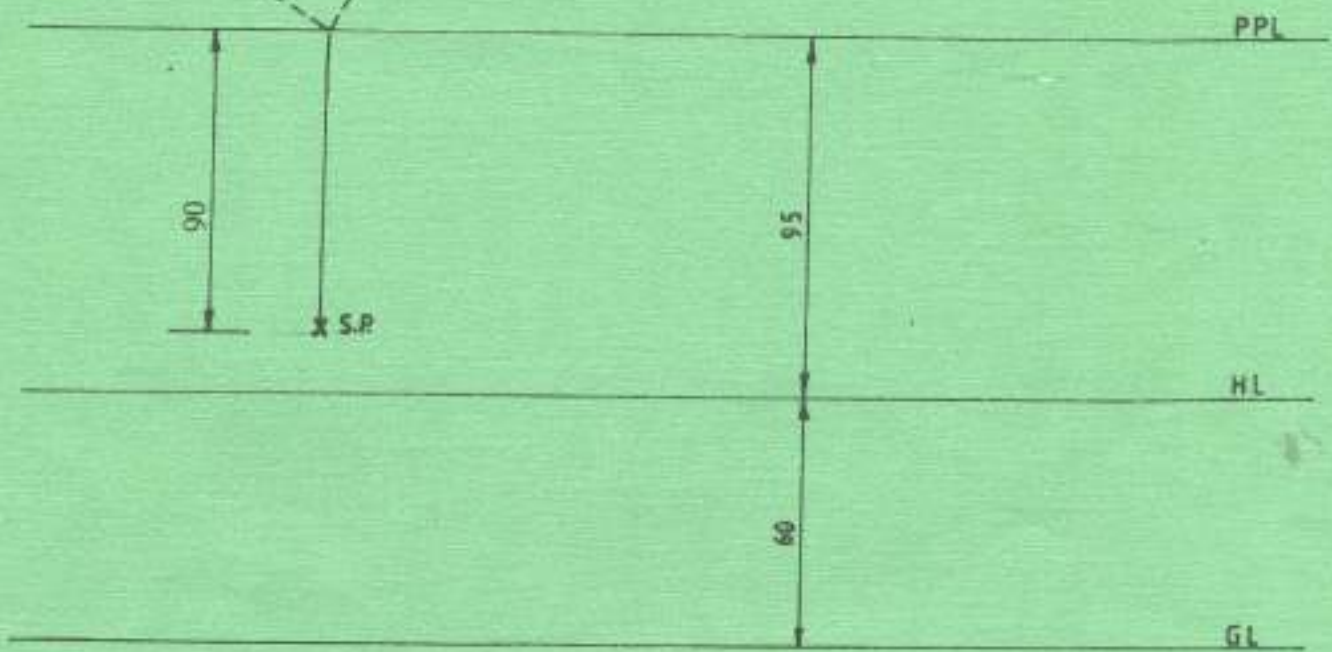
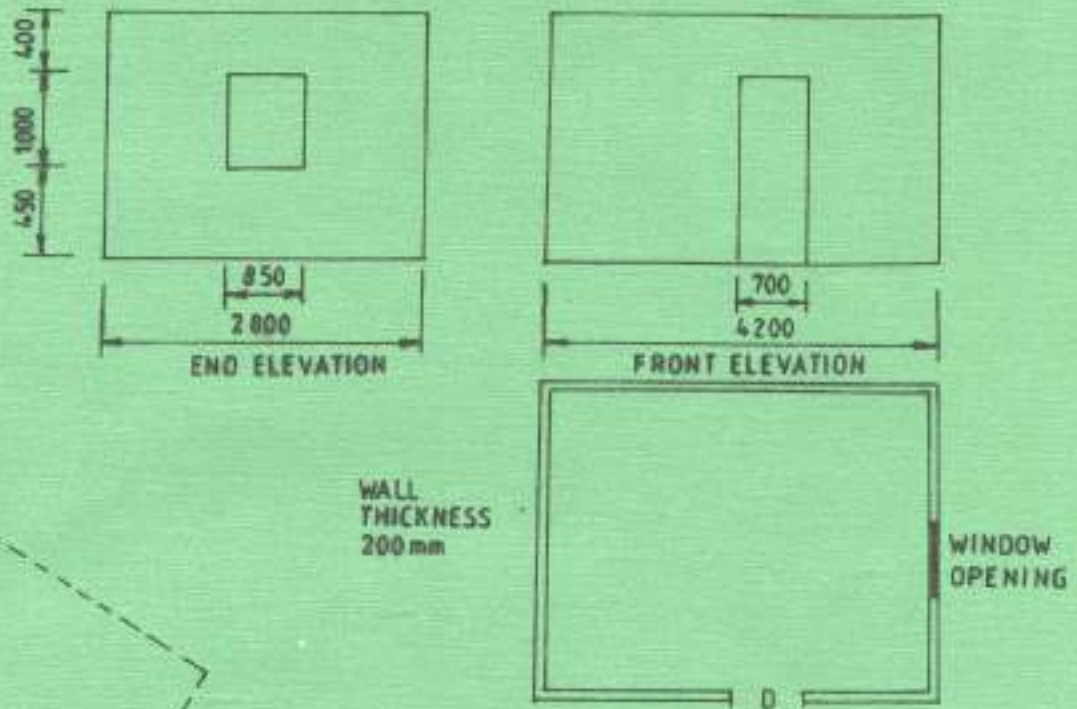


Fig.7

THIS IS THE LAST PRINTED PAGE.